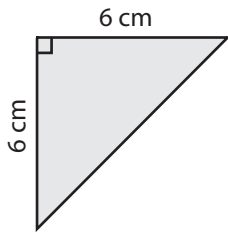


Triangle - Area

ES1

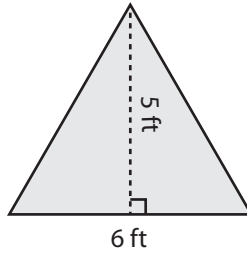
Find the area of each triangle.

1)



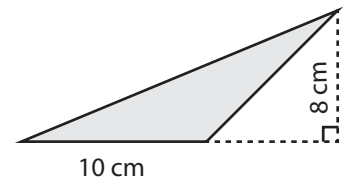
Area =

2)



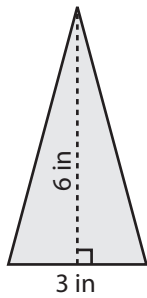
Area =

3)



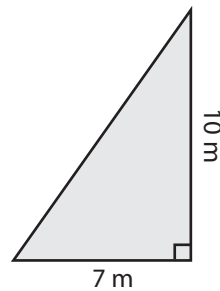
Area =

4)



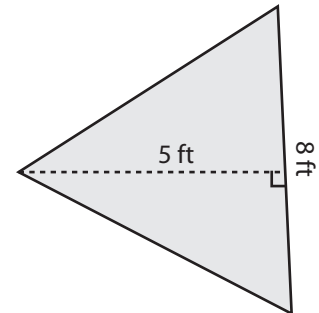
Area =

5)



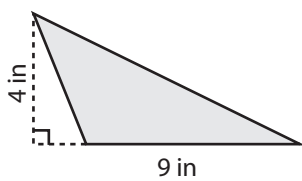
Area =

6)



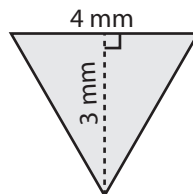
Area =

7)



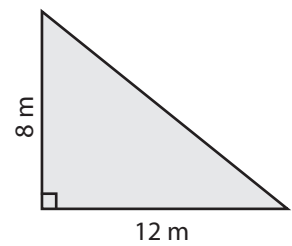
Area =

8)



Area =

9)



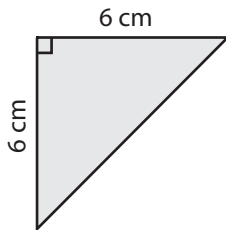
Area =

Answer key**Triangle - Area**

ES1

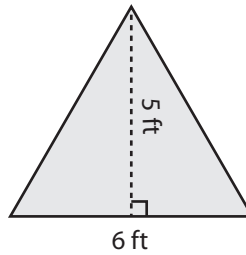
Find the area of each triangle.

1)



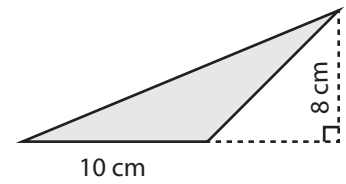
Area = **18 cm²**

2)



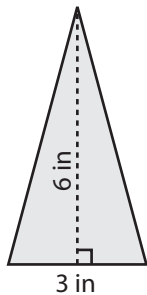
Area = **15 ft²**

3)



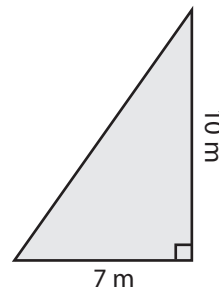
Area = **40 cm²**

4)



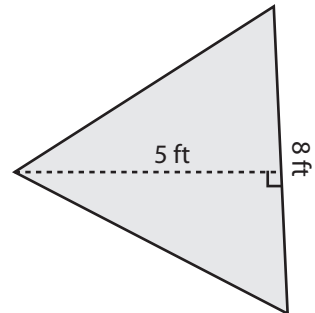
Area = **9 in²**

5)



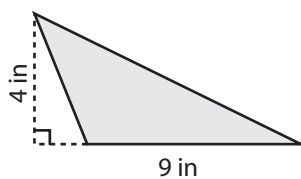
Area = **35 m²**

6)



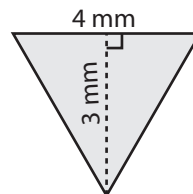
Area = **20 ft²**

7)



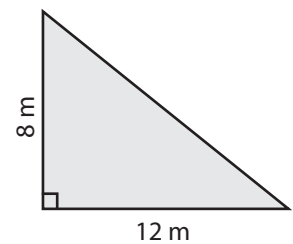
Area = **18 in²**

8)



Area = **6 mm²**

9)



Area = **48 m²**