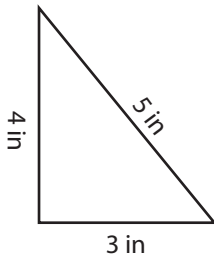


**Triangle - Perimeter**

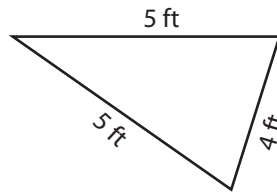
Sheet 1

Find the perimeter of each triangle.

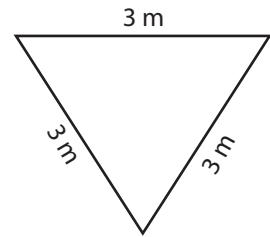
1)

Perimeter = 

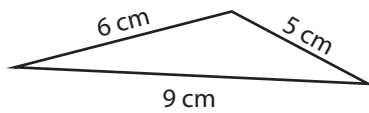
2)

Perimeter = 

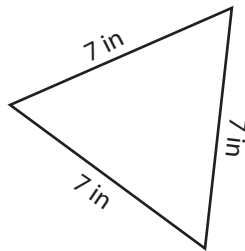
3)

Perimeter = 

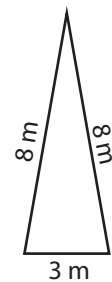
4)

Perimeter = 

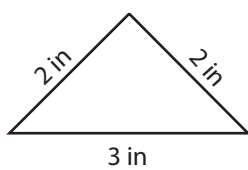
5)

Perimeter = 

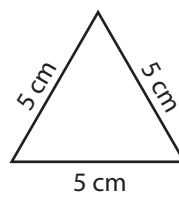
6)

Perimeter = 

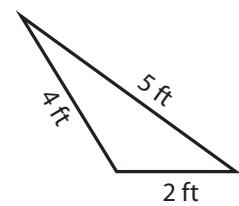
7)

Perimeter = 

8)

Perimeter = 

9)

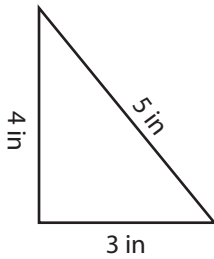
Perimeter =

**Triangle - Perimeter**

Sheet 1

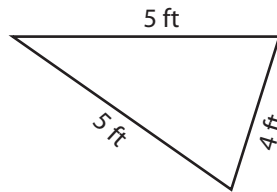
Find the perimeter of each triangle.

1)



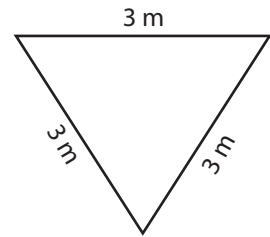
Perimeter = **12 in**

2)



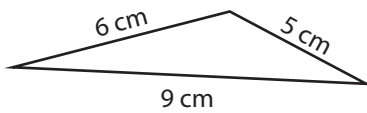
Perimeter = **14 ft**

3)



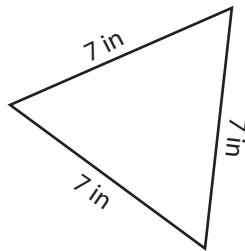
Perimeter = **9 m**

4)



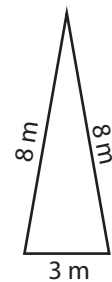
Perimeter = **20 cm**

5)



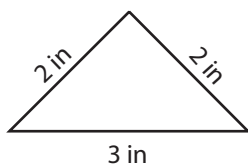
Perimeter = **21 in**

6)



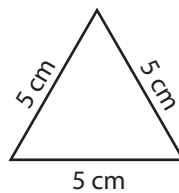
Perimeter = **19 m**

7)



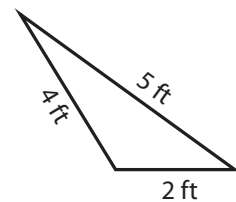
Perimeter = **7 in**

8)



Perimeter = **15 cm**

9)



Perimeter = **11 ft**